

Writing

Can you write a few sentences about what happens in the story we have been looking at in school, The Queen's Hat



Mental Maths

$$10 - 5 =$$

$$10 - 6 =$$

$$10 - 7 =$$

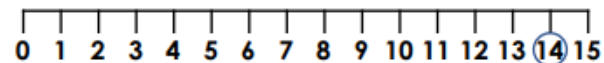
$$10 - 8 =$$

Maths

There are 14 birds sitting in a tree.



Some fly away. Now there are less than 10 left.

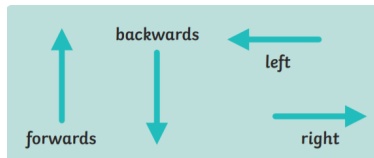


How many birds might have flown away?
Give 3 examples.

Pick a challenge to complete this week.

Computing

Can you give someone instructions on how to move? For example walk 3 steps forwards, turn to the left, walk 2 steps backwards



Geography

Make a 3D model of a famous London landmark



Science

Can you create a fact file about an animal?
Remember to label the features and include details about their characteristics, diet and habitat.




PSHE

Draw a picture of what you would like to be when you grow up. Have a go at writing a sentence to explain your dream job.



RE

Have a go at making some Challah bread with your family. Why is Challah bread eaten on Shabbat?



PE

Can you create an 8 step sequence dance to your favourite song?



Year 1's
Home Learning

Homework due back on
12.02.25